



SEEDLING

THE WORLD SCHOOL

Term III 2019-20

Consolidated Worksheet no . 1

MATHEMATICS

Total Marks 15

Name: _____ Grade: II Roll No: _____ Date: _____

1. $7 \times 5 = \dots\dots\dots$ [1]

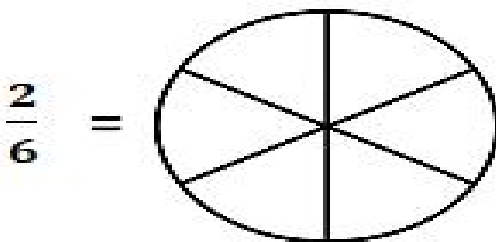
2. $14 \div 2 = \dots\dots\dots$ [1]

3. 10 times 20 = $\dots\dots\dots$ [1]

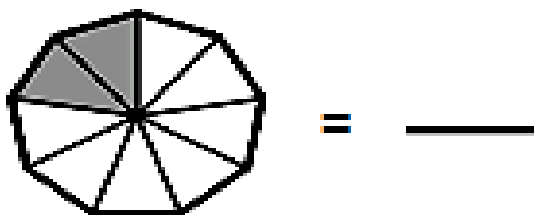
4. $3800 \div 100 = \dots\dots\dots$ [1]

5. 10 min after 4 : 15 pm = $\dots\dots\dots$ [1]

6. Shade the given fraction of the given shape. [1]



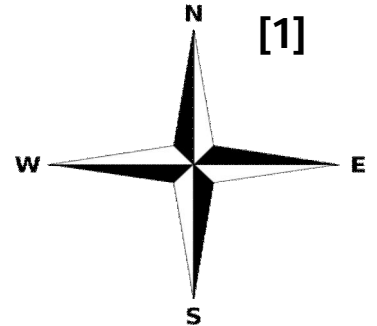
7. Write fraction of the shaded part. [1]



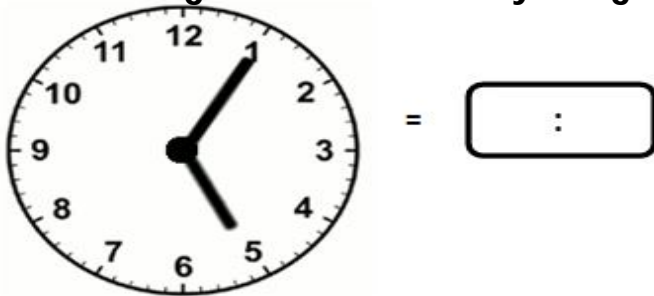
8. 4.06 = Rupees and Paise [1]

9. In a Square Sides are equal (All / Opposite) [1]

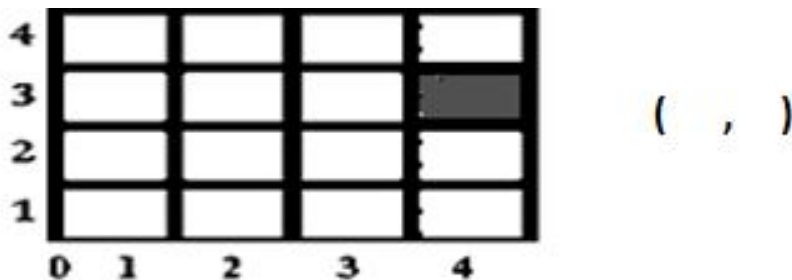
10. I was facing towards North then I turned
One right angle Clockwise. In which direction
Am I facing now ?
I am facing towards



11. Write the Digital time shown by the given clock.



12. Tell position of the shaded square. [1]



13. There were 48 Birds on a branch of a tree. 19 Birds flew away. How many bird are now ? [1]

Number of birds before =

Number of birds left now =

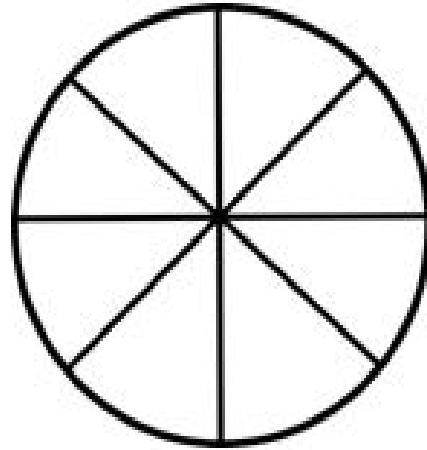
Working:-

14. This circle has been divided into 8 equal parts.

[2]

Shade $\frac{2}{4}$ of the shape.

Shade $\frac{2}{4}$ of 8 =





Term III 2019-20

Consolidated Worksheet no . 2

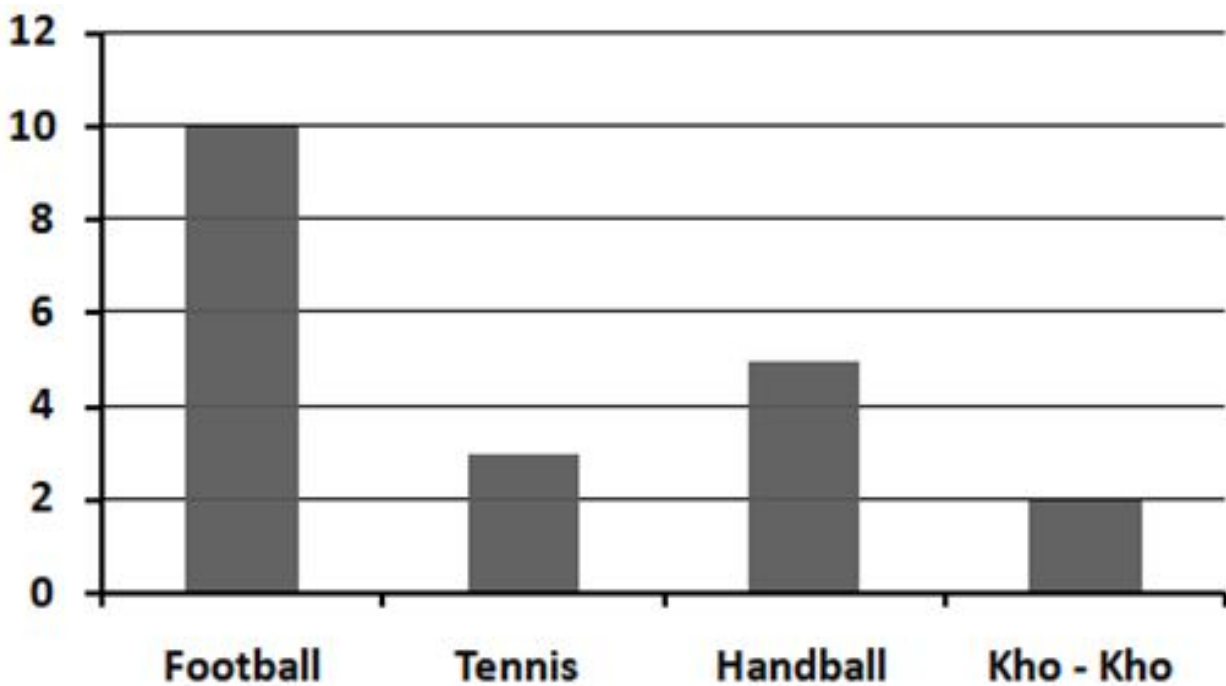
MATHEMATICS

Total Marks 15

Name: _____ Grade: II Roll No: _____ Date: _____

1. This bar graph shows Favourite sport of students. [4]

Use the given bar graph to make a tally chart.



Favourite Sport	Number of students	Tally Marks
Football		
Tennis		
Handball		
Kho-Kho		

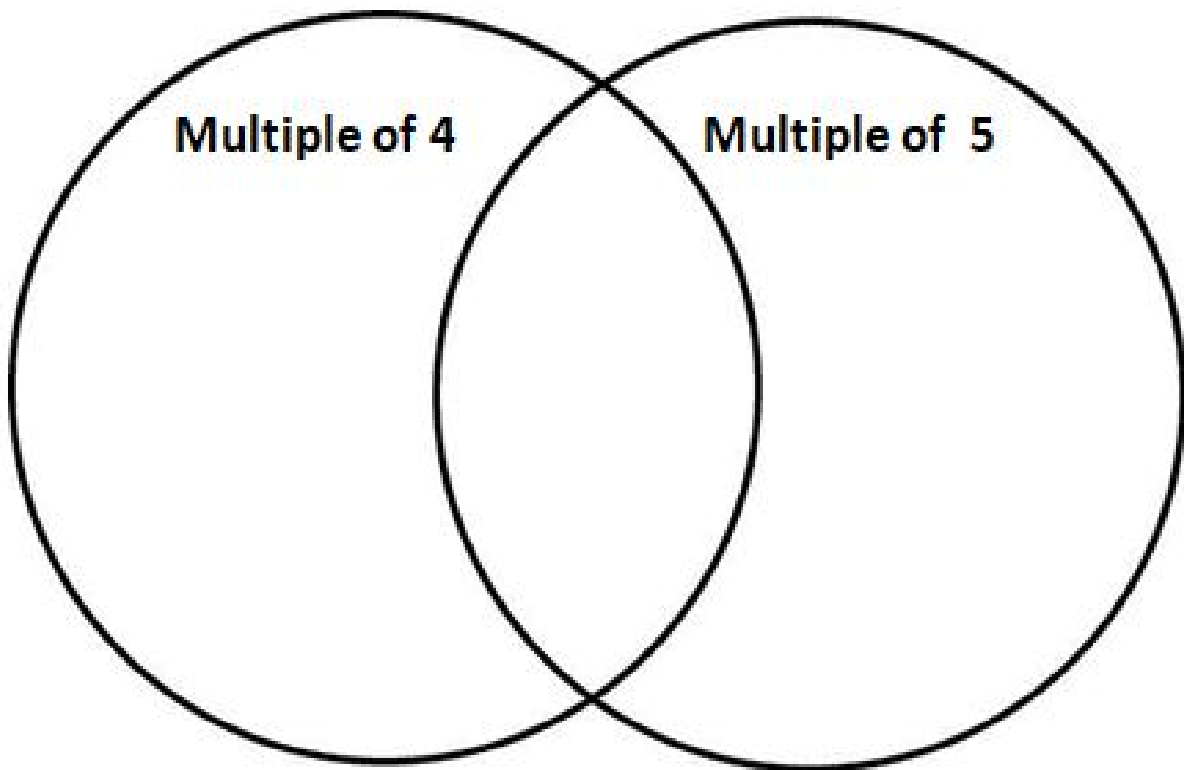
2. Fill in the blanks and complete the table.

[3]

Money I had	Money I spent	Money I have now
23 Rupees	19 Rupees
.....	30 Rupees	70 Rupees
80 Rupees		30 Rupees

3. Write the given numbers at their correct place in the Venn diagram [4]


16 20 10 15 8



4. Use the given data to prepare a pictogram.

[4]

Names	Number of Cookies eaten
Aarav	14
Soumya	20
Nishka	18
Sheena	24

Key  = 4 Cookies

Names	Number of Cookies eaten
Aarav	
Soumya	
Nishka	
Sheena	